








PL - počítame do 100 so ZOO zvieratkami

Meno: _____



1. ZOO kartičky s číslami usporiadaj podľa veľkosti. Začni najväčším.

37 	61 	80 	72 	59 	94 
---	---	---	---	---	---

<input type="text"/>	<input type="text"/>	<input type="text"/>	<input type="text"/>	<input type="text"/>	<input type="text"/>
----------------------	----------------------	----------------------	----------------------	----------------------	----------------------

2. Vypočítaj.

$34 + 10 = \square$

$13 + 10 = \square$

$51 + 10 = \square$

$48 + 10 = \square$

$29 + 10 = \square$

$74 + 10 = \square$

$63 + 10 = \square$

$88 + 10 = \square$

$10 + 45 = \square$

$10 + 59 = \square$

$10 + 71 = \square$

$10 + 36 = \square$

3. Nájdi ukryté číslo.

$37 + \square = 47$

$82 + \square = 92$

$64 + \square = 74$

$10 + \square = 28$

$10 + \square = 53$

$10 + \square = 89$

4. Porovnaj.

$45 \square 37$

$91 \square 99$



$28 \square 28$

5. Dopln.

$56 < \square$

$39 > \square$

6. Vypočítaj reťazovku.

 35 
 $+ 40 \square - 50 \square + 20 \square - 5 \square + 60$

7. Na návštevu do ZOO prišlo veľa ľudí.

muži30

ženy20

deti45

spolu?

<input type="text"/>	<input type="text"/>	<input type="text"/>	<input type="text"/>	<input type="text"/>	<input type="text"/>	<input type="text"/>
----------------------	----------------------	----------------------	----------------------	----------------------	----------------------	----------------------

Do ZOO prišlo spolu ľudí.

