

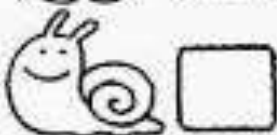


Nájdí na obrázku toľko predmetov, koľko ich udáva číslo pod obrázkom.




- | | | | | | | | | | | | | | | | | | | | |
|---|--|---|--|---|--|---|--|---|--|---|--|---|--|---|--|---|--|---|--|
| 2 | | 4 | | 4 | | 5 | | 4 | | 5 | | 7 | | 4 | | 6 | | 5 | |
| 1 | | 6 | | 7 | | 1 | | 3 | | 6 | | 7 | | 4 | | 7 | | 5 | |
| 3 | | 3 | | 4 | | 6 | | 2 | | 7 | | 5 | | 9 | | 6 | | 3 | |

Nájdí na obrázku dané predmety
a do rámečka dopíš ich počet.




Nájdi na obrázku toľko predmetov, koľko ich udáva číslo pod obrázkom.




- | | | | | | | | | | | | | | | | | | | | |
|---|--|---|--|---|--|---|--|---|--|---|--|---|--|---|--|---|--|---|--|
| 2 | | 4 | | 4 | | 5 | | 4 | | 5 | | 7 | | 4 | | 6 | | 5 | |
| 1 | | 6 | | 7 | | 1 | | 3 | | 6 | | 7 | | 4 | | 7 | | 5 | |
| 3 | | 3 | | 4 | | 6 | | 2 | | 7 | | 5 | | 9 | | 6 | | 3 | |

Nájdí na obrázku ukryté předměty



Nájdí na obrázku toľko predmetov, koľko ich udáva číslo pod obrázkom.



- | | | | | | | | | | | | | | | | | | | | |
|---|--|---|--|---|--|---|--|---|--|---|--|---|--|---|--|---|--|---|--|
| 2 | | 4 | | 4 | | 2 | | 4 | | 5 | | 7 | | 4 | | 6 | | 5 | |
| 1 | | 2 | | 7 | | 1 | | 3 | | 6 | | 7 | | 4 | | 7 | | 4 | |
| 3 | | 6 | | 4 | | 6 | | 2 | | 7 | | 3 | | 9 | | 6 | | 3 | |